

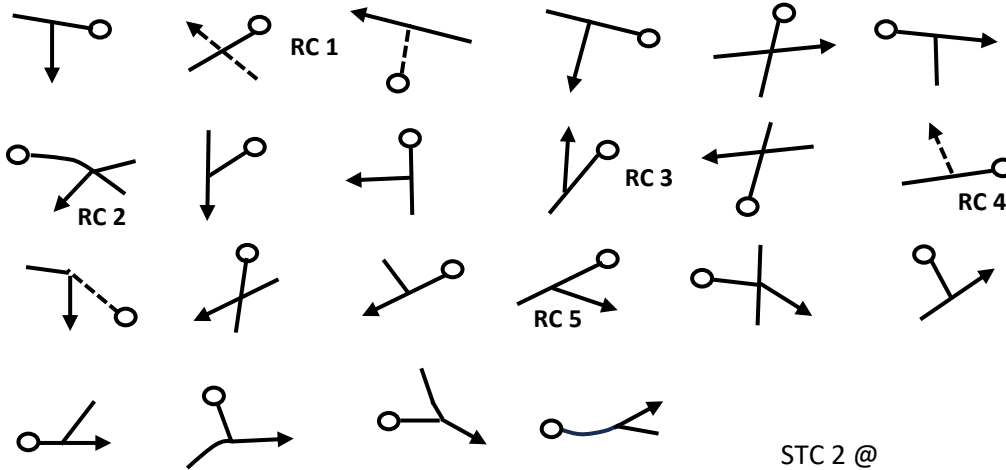
Hexham & District Motor Club



MTC 1 -STC 2

C.A.R.

MTC 1 @ 986½ 687 (Depart west)



STC 2 @
987 675

- RC1 What is the first grid line you cross once on the white?
- RC2 Name of the cottage at the junction?
- RC3 Which grid line do you cross twice near this junction?
- RC4 What letter do you pass through when on the white?
- RC5 Which grid line do you cross at this junction?

Hexham & District Motor Club



STC 2 - STC 3

C.R.O.

Exit grid squares in the following directions

S E N S E (RC6) E E E (RC7) S E E N N (RC8) W N W E N N N (RC9) W N E E

W N W W N E (RC10)

STC 3 @ 033 748

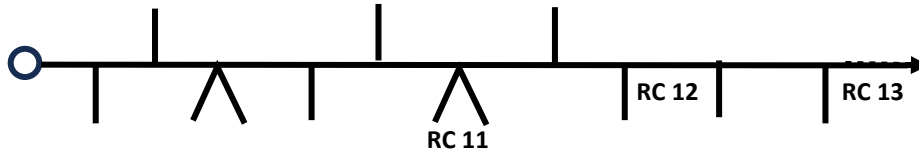
- RC6 Castle
- RC7 Edge
- RC8 Fm
- RC9 What is the next spot height you pass through?
- RC10 How many green dots do you completely pass through in this section?

Hexham & District Motor Club



STC 3 - STC 4s

C.R.O.



STC 4s @
983½ 764

-
- RC11 Rich
 - RC12 Walls
 - RC13 What is the last spot height you pass through before STC4s?

Hexham & District Motor Club



STC 4s - STC 5

C.A.R.

STC 5 @ 988 757½

Hexham & District Motor Club



STC 5 - STC 6s

C.A.R.

Take the shortest route from STC 5 to STC 6s going via the following grid references approaching them from the correct direction.

Approach	Go Via	
N	009¼ 742½	
E	981 709	STC 6s @
E	985 744	952 745½

-
- RC14 How many green dots do you pass through on this section?

Hexham & District Motor Club



STC 6s - STC 7

C.R.O.

STC 7 @ 933 768

Hexham & District Motor Club




STC 7 - STC 8s

C.R.O.

Use the following code, and the corresponding grid to navigate yourself to the finish

A1 B3 E2 D1 D3 E2 F3 C2 B2 C3 F1 D2 E3 B1 A3 B4 F4 F2 D4 A4
E1 E4 C4 C1 A2

	A	B	C	D	E	F
1	187	119	87	RC15	141	RC16
2	RC17	168	193	132	227	77
3	106	204	181	249 	83	236
4	126	116	117	94	118	97

STC 8s @ 932 712¼

- RC15 Law
- RC16 Hill
- RC17 What is the name of the last farm you pass?