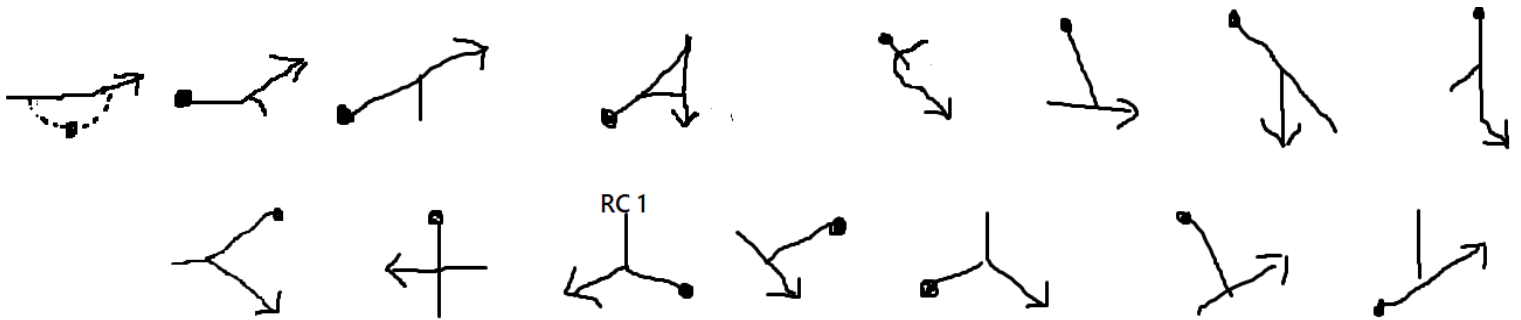


May table top rally

Start in lay-by at 955.5 638

MTC 1 – STC 2 C.R.O



STC 2 @ 008 617

RC 1 : Name of property at junction

RC2 : First property on right between GL 98 99

ST2 – NTC 3 C.R.O (Quiet in riding mill)

Proceed via shortest route to NTC at 023 601

RC 3 : Name of both A roads that you use

NTC 3 – STC 4 C.R.O

**03 60 03 59 03 58 03 03 57 57 04 05 57 56 05
05 06 55 06 05**

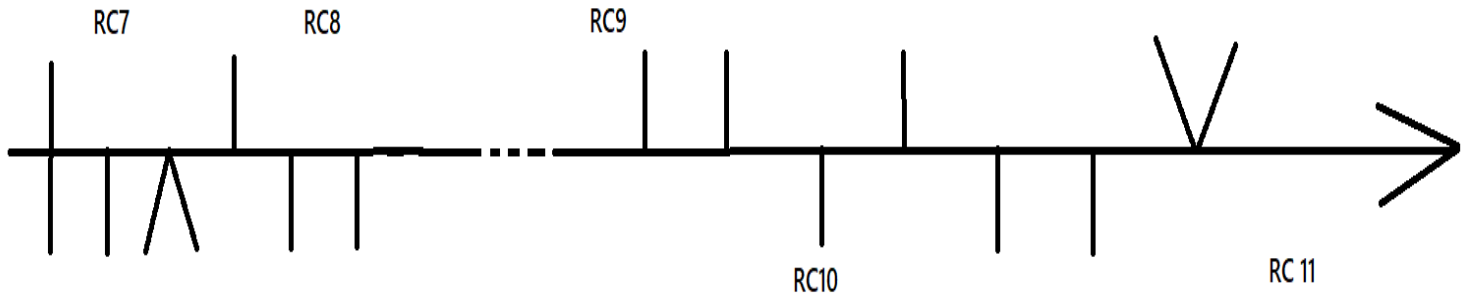
STC 4 @ 042 544.5

RC 4 : SH between 58+03

RC 5 : Name of farm between 04 and 05

RC 6 : SH between 06 and 05

STC 4 – STC 5s CRO apart from when dotted line



STC 5s at 065 511

- RC 7 : Colour of road you are on when first passing GL 55
- RC 8 : Name of building
- RC 9 : Name of building at end of white
- RC 10 : Name of B Road
- RC 11 : Next SH after crossroads

STC 5s to STC 6 C.A.R

**51 06 50 49 06 48 06 47 05 46 04 396 03 46
47 48 02 01 01 01 256 297 316 48 47 407 46
441 45 476 471 00 44 466 44 (499 under
green dot) 99 98 45 482 97 46 418 424 47
436 48 96 49 96**

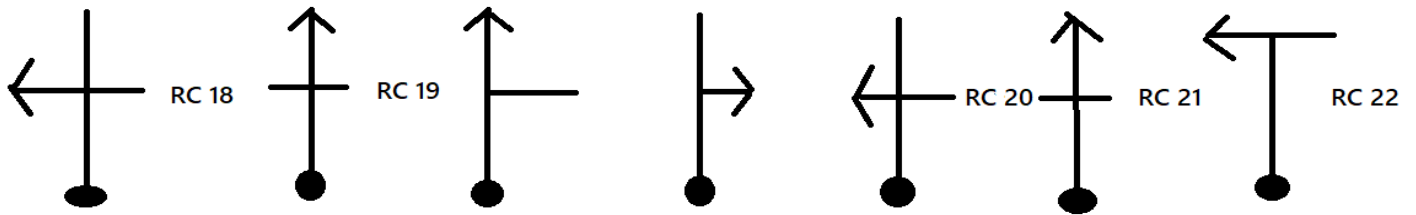
STC6 at 967.5 498 C.A.R

- RC 12 : Name of farm before first white you use
- RC 13 : Name of reserivior you pass
- RC 14 : SH on hill between 47 and 48
- RC 15 : SH as you join the B road
- RC 16 : SH before expired monks
- RC 17 : Name of farm you pass through on both sides before ST6

STC 6 – NTC 7:

Follow shortest route to NTC 7 at 974 567

NTC 7 – STC 8s C.R.O



RC 18 : What colour house?

RC 19 : Whos field

RC 20: _____ Syke?

RC 21: Map feature before PH

RC 22 : What colour house

STC 8s 9315 619

STC 8s to STC 9 C.A.R

Blackspot 100mR 843 633

SSW 9325 6235 W

ESE 8905 6225 NE

SW 904 6395 W

ESE 8865 638 WSW

ENE 851 6315 WSW

S 8355 6265 ENE

WNW 859 6455 ESE

STC 9 at 8865 6375

RC 23 : Last SH before junction with B Road

RC 24 : What gate?

RC 25 : What property are you avoiding?

RC 26 : Last SH before A69

RC 27 : What hall before STC 9?

RC 28 : First property on left after SH187 What is it's name?

Rally finished. Hand in your time card, route checks and head to the bar!